

4th lesson

<https://www2.karlin.mff.cuni.cz/~kuncova/en/teachIM.php>, kunck6am@natur.cuni.cz

Algorithm

1. Find, if there is an equation with product or division, which is equal to zero. This gives various conditions.
2. Consider every such case separately and apply to the other equations.
3. Solve the other equations - it gives solutions.
4. Write out all solutions from all cases.
5. Another way: express one variable using the others (be careful about dividing by a variable). Then apply to the other equations and solve.

Exercises

Solve

1. (a) $2x - 4 = 0$
 $2y + 2 = 0$
(f) $6x^2 - 6y = 0$
 $-6x + 2y + 4 = 0$
- (b) $2x + 3y - 5 = 0$
 $3x + 4y - 8 = 0$
(g) $y(5x + y - 15) + 5xy = 0$
 $x(5x + y - 15) + xy = 0$
- (c) $2x^2 + 3y^2 + 10x = 0$
 $xy + 3y = 0$
(h) $e^{y^2-2x^2} + xe^{y^2-2x^2}(-4x) = 0$
 $2yxe^{y^2-2x^2} = 0$
- (d) $3x^2 - 3y = 0$
 $3y^2 - 3x = 0$
(i) (e) $3x^2 - 4x - 2y + z = 0$
 $2x - 2y + 2 = 0$
 $2y - 2x - z = 0$
 $-2x + 4y - 6 = 0$
 $2z + x - y + 3 = 0$

2. (a)

$$\begin{aligned}2x - 2 &= \lambda \\8y + 8 &= 2\lambda \\x + 2y &= 7\end{aligned}$$

(b)

$$\begin{aligned}48 - 2x - 2y &= 5\lambda \\96 - 2x - 18y &= \lambda \\5x + y &= 54\end{aligned}$$

(c)

$$\begin{aligned}5 &= 2\lambda x \\-3 &= 2\lambda y \\x^2 + y^2 &= 136\end{aligned}$$

(d)

$$\begin{aligned}2x - 6 &= 2x\lambda \\2y + 6 &= 2y\lambda \\x^2 + y^2 &= 4\end{aligned}$$

(e)

$$\begin{aligned}yz &= \lambda \\xz &= \lambda \\yx &= \lambda \\x + y + z &= 1\end{aligned}$$

(f)

$$\begin{aligned}2x &= \lambda(2x - 2) \\4y &= \lambda(4y + 4) \\x^2 - 2x + 2y^2 + 4y &= 0\end{aligned}$$

(g)

$$\begin{aligned}2x &= \lambda \\3(y + 3) &= \lambda \\2(z - 2) &= -\lambda \\x + y - z &= 1\end{aligned}$$

www.solvemoji.com - EXPERT
SOLUTIONS, PUZZLES & LEADERBOARDS ONLINE

$$\text{🍈} \times \text{🍓} - \text{🍈} = 558$$

$$\text{🍈} + \text{🍒} + \text{🍒} = 70$$





$$\text{🍒} \times \text{🍒} + \text{🍓} = 697$$

$$\text{🍈} + \text{🍓} \times \text{🍒} = ?$$

Puzzle ID: 10059 **Solvemoji.com**

<https://www.solvemoji.com/Puzzle/Puzzle/10059/>

www.solvemoji.com - HARD
SOLUTIONS, PUZZLES & LEADERBOARDS ONLINE

	+		=	17
+		x		
	+		=	22
=		=		
23		60		

$$\text{🐸} + \text{🐹} \times \text{🐱} = ?$$

Puzzle ID: 39814 **Solvemoji.com**

<https://www.solvemoji.com/Puzzle/Puzzle/39814/>

www.solvemoji.com - EXPERT
SOLUTIONS, PUZZLES & LEADERBOARDS ONLINE

$$\text{🎄} - \text{🧣} \times \text{🎄} = -216$$

$$\text{🎄} + \text{🧊} \times \text{🧊} = 177$$

$$\text{🧣} - \text{🧣} \times \text{🧊} = -70$$

$$\text{🧊} \times \text{🎄} \times \text{🧣} = ?$$

Puzzle ID: 20935 **Solvemoji.com** **🎄 XMAS EDITION 🎁**

<https://www.solvemoji.com/Puzzle/Puzzle/20935/>

www.solvemoji.com - HARD
SOLUTIONS, PUZZLES & LEADERBOARDS ONLINE

$$\text{🦇} + \text{🎃} + \text{🦇} = 54$$

$$\text{👾} + \text{👾} \times \text{🦇} = 336$$

$$\text{👾} + \text{🎃} + \text{👾} = 38$$

$$\text{🦇} \times \text{🎃} \times \text{👾} = ?$$

Puzzle ID: 17209 **Solvemoji.com** **👻 HALLOWEEN EDITION 🕷️**

<https://www.solvemoji.com/Puzzle/Puzzle/17209/>